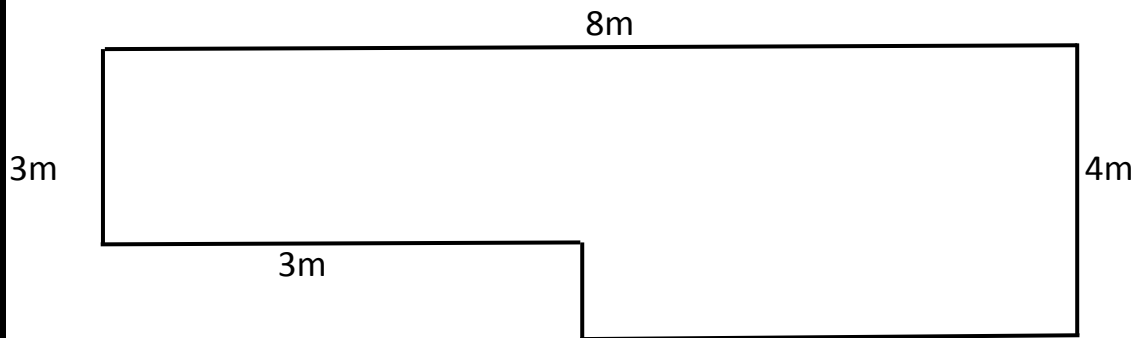


Name	Block F	Sheet 1		Class	Score
------	---------	---------	--	-------	-------

Functional Problems

1)

Peter wants to buy enough varnish to cover his floor.



Each tin of varnish covers  $5\text{m}^2$  of floor.

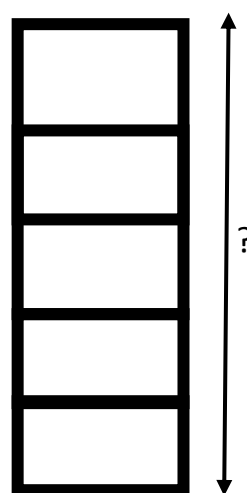
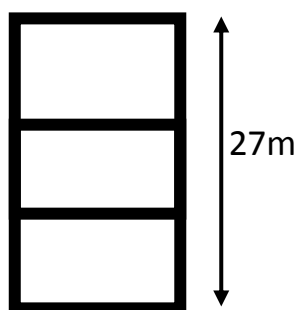
Each tin costs £5.

Peter has £28.

Does Peter have enough money?

Show all working out.

2)



Three boxes have a height of 27m

What is the height of 5 boxes?

Show all working out.