

Name	Block B Sheet 5	Class	Score
------	--------------------	-------	-------

Section A

Multiply

- a) $11 \times 9 =$
- b) $12 \times 10 =$
- c) $13 \times 11 =$
- d) $12 \times 12 =$
- e) $11 \times 11 =$

Section B

Subtract

- a) $200 - 79 =$
- b) $199 - 179 =$
- c) $88 - 39 =$
- d) $66 - 109 =$
- e) $22 - 39 =$

Section C

BIDMAS

- a) $9x - 4 - 2 =$
- b) $8x + 3 + 9 =$
- c) $19 + 9x + 4 =$
- d) $12(1 + 3) =$
- e) $18 + (9 - 9) =$

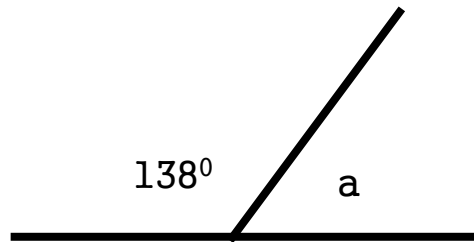
Section D

List the factors

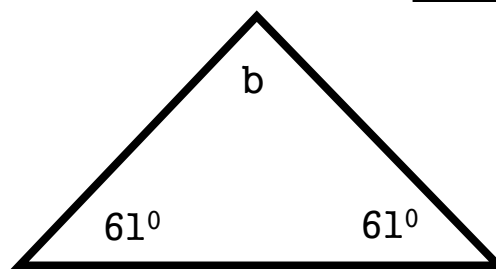
- a) 1 _____
- b) 4 _____
- c) 9 _____
- d) 16 _____
- e) 25 _____

Section E

Work out the missing angles.



a =



b =

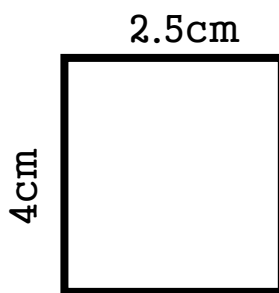
Section F

collect the like terms

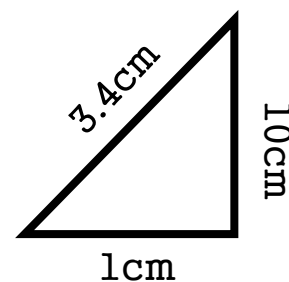
- a) $b + b + b =$
- b) $3b - 2b - 2b =$
- c) $9c - 3b - 12c =$

Section G

Find the Area and Perimeter



A =
P =



A =
P =