

Name	Block B Sheet 4	Class	Score
------	--------------------	-------	-------

Section A

Multiply

- a) $12 \times 8 =$
- b) $12 \times 7 =$
- c) $12 \times 6 =$
- d) $12 \times 12 =$
- e) $12 \times 15 =$

Section B

Subtract

- a) $200 - 79 =$
- b) $192 - 103 =$
- c) $88 - 49 =$
- d) $64 - 105 =$
- e) $23 - 33 =$

Section C

BIDMAS

- a) $-4 - 4 \times 2 =$
- b) $15 / 3 + 2 =$
- c) $19 - 9 \times 2 =$
- d) $12 + (1 + 3) =$
- e) $18(9 - 9) =$

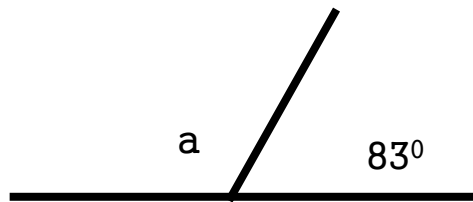
Section D

List the factors

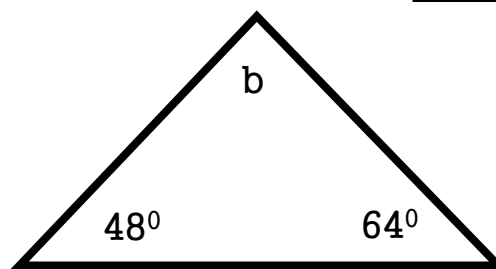
- a) 20 _____
- b) 19 _____
- c) 18 _____
- d) 17 _____
- e) 36 _____

Section E

Work out the missing angles.



a =



b =

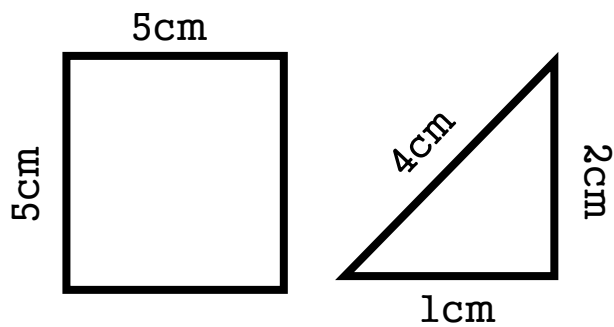
Section F

collect the like terms

- a) $a + a + 4a =$
- b) $3a + 4a - 9a =$
- c) $9c + 3b - 12c =$

Section G

Find the Area and Perimeter



A =
P =

A =
P =