

| | | | |
|------|--------------------|-------|-------|
| Name | Block B Sheet 3 | Class | Score |
|------|--------------------|-------|-------|

Section A

Multiply

- a) $8 \times 9 =$
- b) $11 \times 9 =$
- c) $12 \times 9 =$
- d) $8 \times 12 =$
- e) $6 \times 9 =$

Section B

Subtract

- a) $161 - 68 =$
- b) $49 - 62 =$
- c) $92 - 83 =$
- d) $56 - 110 =$
- e) $18 - 39 =$

Section C

BIDMAS

- a) $12 - 3 + 2 =$
- b) $5 \times 5 - 2 =$
- c) $19 - 5 \times 2 =$
- d) $48 \div (6 \div 2) =$
- e) $15(9 - 8) =$

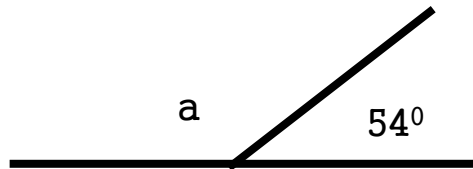
Section D

List the factors

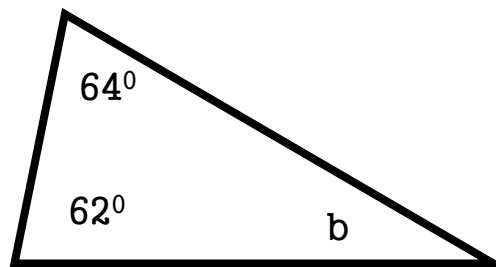
- a) 12 _____
- b) 13 _____
- c) 14 _____
- d) 15 _____
- e) 16 _____

Section E

Work out the missing angles.



a =



b =

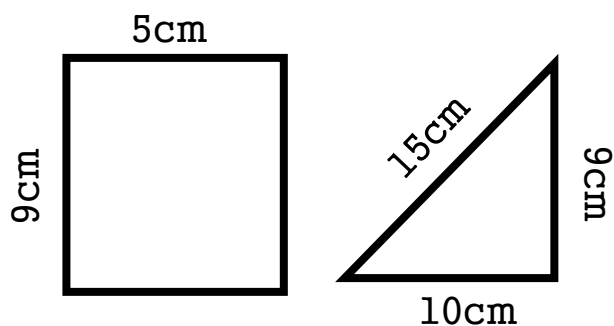
Section F

collect the like terms

- a) $2a + a + 2a =$
- b) $2a + 4a - 6a =$
- c) $8b + 3b - 4d =$

Section G

Find the Area and Perimeter



A =
P =

A =
P =