

Name	Block B Sheet 2	Class	Score
------	--------------------	-------	-------

Section A

Multiply

- a) $9 \times 7 =$
- b) $7 \times 7 =$
- c) $6 \times 5 =$
- d) $5 \times 7 =$
- e) $8 \times 11 =$

Section B

Subtract

- a) $180 - 68 =$
- b) $136 - 62 =$
- c) $91 - 83 =$
- d) $48 - 110 =$
- e) $12 - 39 =$

Section C

BIDMAS

- a) $3 \times 3 + 8 =$
- b) $15 / 5 - 2 =$
- c) $24 - 8 \times 7 =$
- d) $50 / 5 \times 3 =$
- e) $9 + (4 - 6) =$

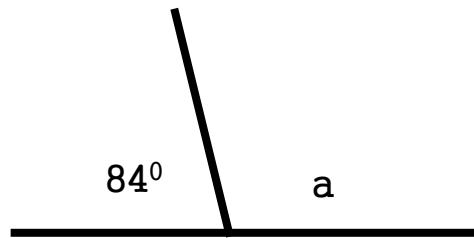
Section D

List the factors

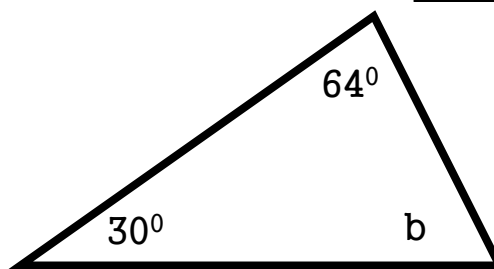
- a) 9 _____
- b) 16 _____
- c) 22 _____
- d) 8 _____
- e) 11 _____

Section E

Work out the missing angles.



$a =$



$b =$

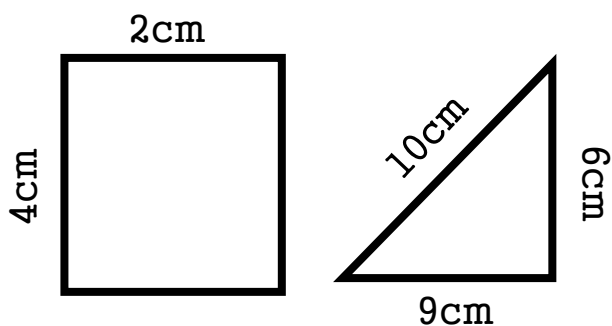
Section F

collect the like terms

- a) $a + 2a + a =$
- b) $2a + 4a - 3a =$
- c) $9a + 3c - 4a =$

Section G

Find the Area and Perimeter



$A =$
 $P =$

$A =$
 $P =$