

Name	Block B Sheet 1	Class	Score
------	--------------------	-------	-------

Section A

Multiply

- a) $4 \times 7 =$
- b) $5 \times 3 =$
- c) $7 \times 9 =$
- d) $9 \times 7 =$
- e) $2 \times 11 =$

Section B

Subtract

- a) $200 - 45 =$
- b) $195 - 39 =$
- c) $87 - 84 =$
- d) $65 - 120 =$
- e) $18 - 39 =$

Section C

BIDMAS

- a) $2(3 + 4) =$
- b) $15 - 3 \times 2 =$
- c) $7 + 8 \times 3 =$
- d) $12 / 4 - 1 =$
- e) $3 + (9 / 3) =$

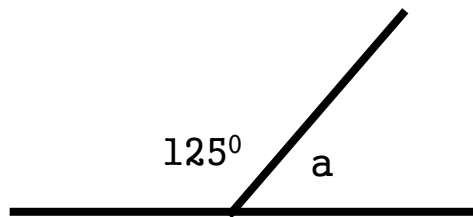
Section D

List the factors

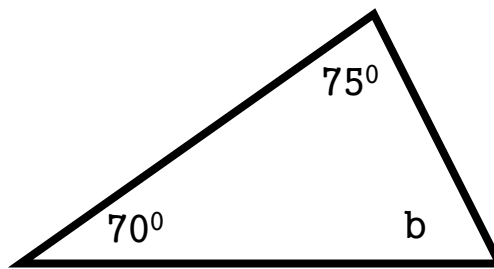
- a) 6 _____
- b) 10 _____
- c) 20 _____
- d) 15 _____
- e) 7 _____

Section E

Work out the missing angles.



a =



b =

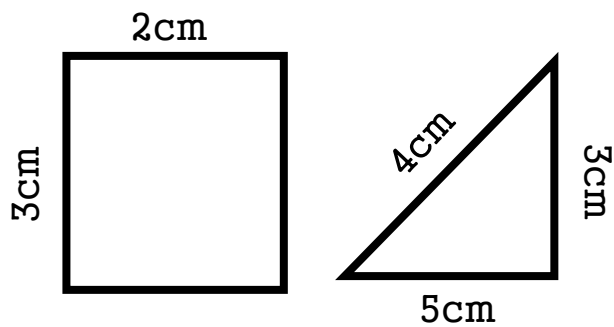
Section F

collect the like terms

- a) $a + a + a =$
- b) $2a + 3a - a =$
- c) $4a + 2b - 3b =$

Section G

Find the Area and Perimeter



A =
P =

A =
P =