

Name	Sheet 6	Class	Score
------	------------	-------	-------

Section A

Multiply

- a) $15 \times 3 =$
- b) $6 \times 9 =$
- c) $15 \times 4 =$
- d) $6 \times 10 =$
- e) $15 \times 5 =$

Section B

Subtract

- a) $201 - 79 =$
- b) $191 - 179 =$
- c) $81 - 39 =$
- d) $61 - 109 =$
- e) $31 - 39 =$

Section C

BIDMAS

- a) $8 \times 3 / 4 =$
- b) $6 + 4 - 9 =$
- c) $6 - 4 + 9 =$
- d) $14 (2 + 3) =$
- e) $3 (2 + 9) =$

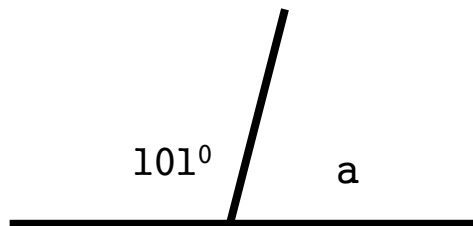
Section D

List the factors

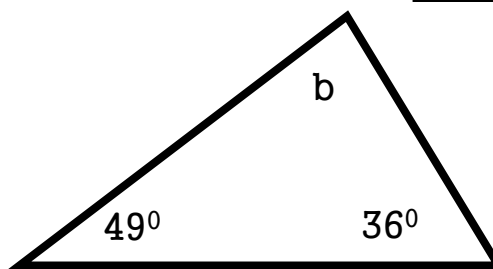
- a) 2 _____
- b) 3 _____
- c) 5 _____
- d) 7 _____
- e) 11 _____

Section E

Work out the missing angles.



a =



b =

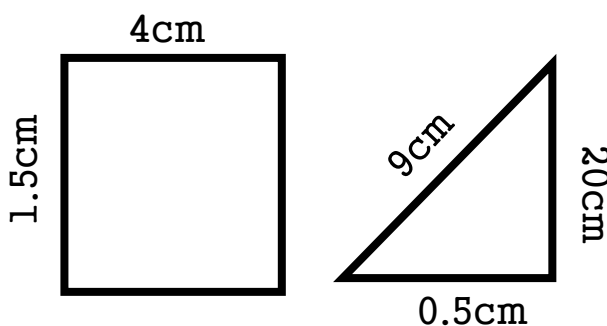
Section F

collect the like terms

- a) $ab + ab + ab =$
- b) $3b - 5b - 2b =$
- c) $2a - ab + 3a =$

Section G

Find the Area and Perimeter



A =
P =

A =
P =