

Name	Sheet 4	Class	Score
------	------------	-------	-------

Section A
Multiply

a) $12 \times 8 =$

b) $12 \times 7 =$

c) $12 \times 6 =$

d) $12 \times 12 =$

e) $12 \times 15 =$

Section B
Subtract

a) $200 - 79 =$

b) $192 - 103 =$

c) $88 - 49 =$

d) $64 - 105 =$

e) $23 - 33 =$

Section C
BIDMAS

a) $-4 - 4 \times 2 =$

b) $15 / 3 + 2 =$

c) $19 - 9 \times 2 =$

d) $12 + (1 + 3) =$

e) $18(9 - 9) =$

Section D
List the factors

a) 20 _____

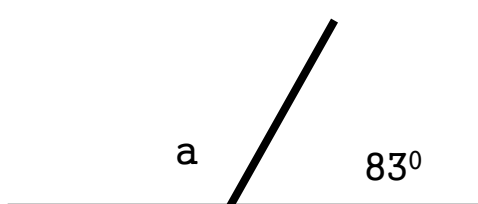
b) 19 _____

c) 18 _____

d) 17 _____

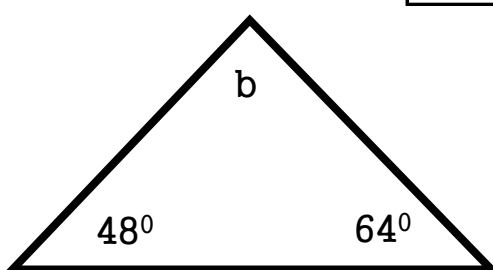
e) 36 _____

Section E
Work out the missing angles.



a 83°

$a =$



b

$b =$


Section F
collect the like terms

a) $a + a + 4a =$

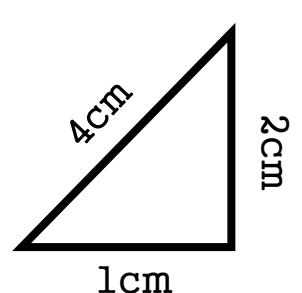
b) $3a + 4a - 9a =$

c) $9c + 3b - 12c =$

Section G
Find the Area and Perimeter



5cm



4cm

2cm

1cm

A=

P=

A=

P=