

Name	Sheet 1	Class	Score
------	------------	-------	-------

Section A
Multiply

a) $4 \times 7 =$

b) $5 \times 3 =$

c) $7 \times 9 =$

d) $9 \times 7 =$

e) $2 \times 11 =$

Section B
Subtract

a) $200 - 45 =$

b) $195 - 39 =$

c) $87 - 84 =$

d) $65 - 120 =$

e) $18 - 39 =$

Section C
BIDMAS

a) $2(3 + 4) =$

b) $15 - 3 \times 2 =$

c) $7 + 8 \times 3 =$

d) $12 / 4 - 1 =$

e) $3 + (9 / 3) =$

Section D
List the factors

a) 6 _____

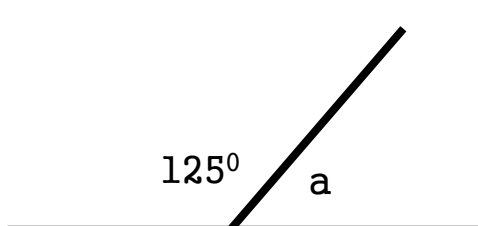
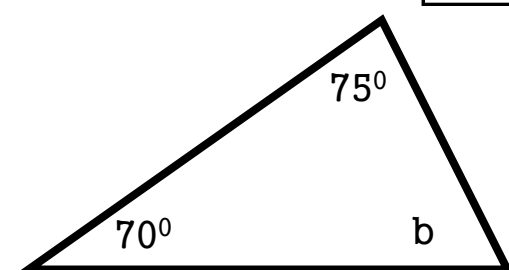
b) 10 _____

c) 20 _____

d) 15 _____

e) 7 _____

Section E
Work out the missing angles.

a =

b =


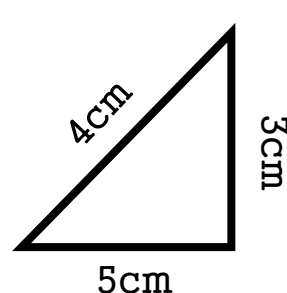
Section F
collect the like terms

a) $a + a + a =$

b) $2a + 3a - a =$

c) $4a + 2b - 3b =$

Section G
Find the Area and Perimeter

A = A =

P = P =